

The AP Calculus Summer Review
NO CALCULATOR & NO DECIMALS!!!

Let $f(x) = x^2 - 2x + 5$. Find the following:

1. $f(-2)$

$$(-2)^2 - 2(-2) + 5$$

$$4 + 4 + 5$$

$$\boxed{13}$$

2. $f(x+2)$

$$(x+2)^2 - 2(x+2) + 5$$

$$x^2 + 4x + 4 - 2x - 4 + 5$$

$$\boxed{x^2 + 2x + 5}$$

3. $f(x+h)$

$$(x+h)^2 - 2(x+h) + 5$$

$$\boxed{x^2 + 2xh + h^2 - 2x - 2h + 5}$$

Use the graph of $f(x)$ to answer the following.

4. $f(0) = -4$

$f(4) = \text{DNE} / \text{undefined}$

$f(-1) = -3.5$

$f(-2) = -2$

$f(2) = \text{DNE} / \text{undefined}$

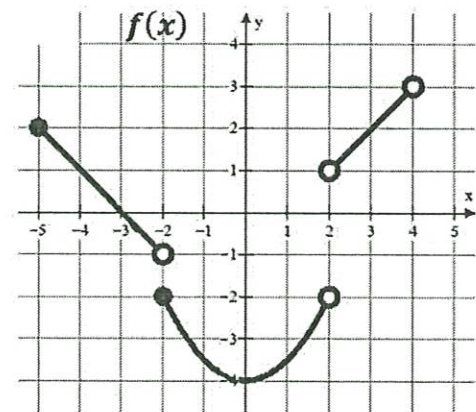
$f(3) = 2$

$f(x) = 2$ when $x = ?$

$x = 3, -5$

$f(x) = -3$ when $x = ?$

$x = -1.5, 1.5$



Write the equation of the line that meets the following criteria. Use slope-intercept $y = mx + b$ or point slope form $y - y_1 = m(x - x_1)$.

5. $m = 3$ and $(4, -2)$

Point slope:

$$y + 2 = 3(x - 4)$$

$$\boxed{y = 3x - 14}$$

$$y = mx + b$$

$$-2 = 3(4) + b$$

$$-14 = b$$

$$\boxed{y = 3x - 14}$$

6. $m = -\frac{3}{2}$ and $f(-5) = 7$
 $(-5, 7)$

Point slope:

$$y - 7 = -\frac{3}{2}(x + 5)$$

$$y - 7 = -\frac{3}{2}x - \frac{15}{2}$$

$$\boxed{y = -\frac{3}{2}x - \frac{1}{2}}$$

$$y = mx + b$$

$$7 = -\frac{3}{2}(-5) + b$$

$$7 = \frac{15}{2} + b$$

$$-\frac{1}{2} = b$$

$$\boxed{y = -\frac{3}{2}x - \frac{1}{2}}$$

7. $f(4) = -8$ and $f(-3) = 12$
 $(4, -8)$ $(-3, 12)$

$$m = \frac{12 - (-8)}{-3 - 4} = \frac{20}{-7}$$

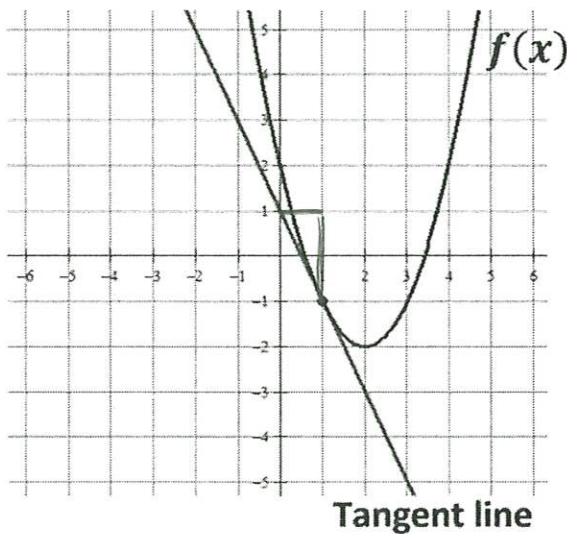
$$y + 8 = -\frac{20}{7}(x - 4)$$

$$y + 8 = -\frac{20}{7}x + \frac{80}{7}$$

$$\boxed{y = -\frac{20}{7}x + \frac{24}{7}}$$

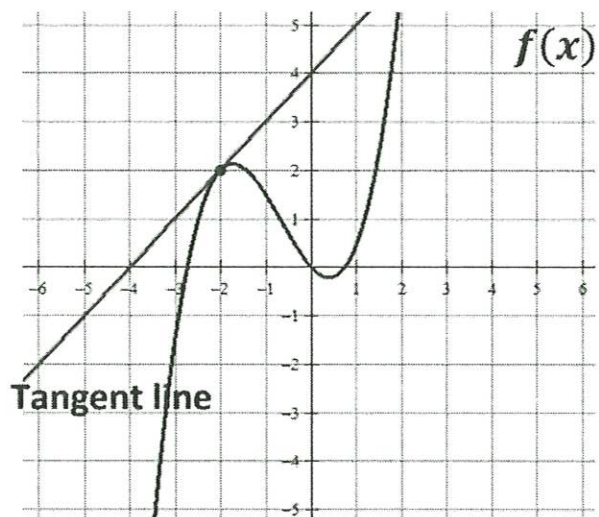
Write the equation of the tangent line shown in slope-intercept form.

8. The line tangent to $f(x)$ at $x = 1$



$$\boxed{y = -2x + 1}$$

9. The line tangent to $f(x)$ at $x = -2$



$$\boxed{y = x + 4}$$

Multiple Choice! Remember SLOPE = $\frac{y_2 - y_1}{x_2 - x_1}$

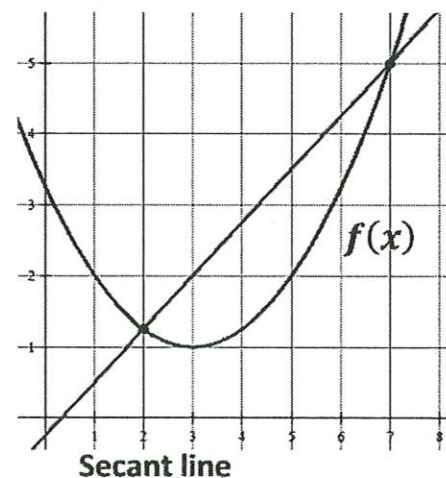
10. Which of the following represents the slope of the secant line?

A) $\frac{7 - 2}{f(7) - f(2)}$

B) $\frac{f(7) - 2}{7 - f(2)}$

C) $\frac{7 - f(2)}{f(7) - 2}$

D) $\frac{f(7) - f(2)}{7 - 2}$



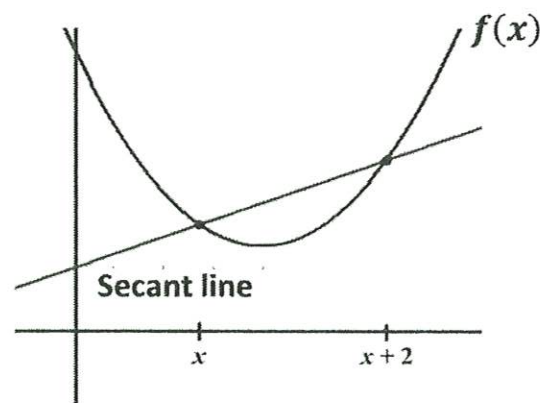
11. Which of the following represents the slope of the secant line?

A) $\frac{f(x) - f(x + 2)}{x + 2 - x}$

B) $\frac{f(x + 2) - f(x)}{x + 2 - x}$

C) $\frac{f(x + 2) - f(x)}{x - (x + 2)}$

D) $\frac{x + 2 - x}{f(x) - f(x + 2)}$



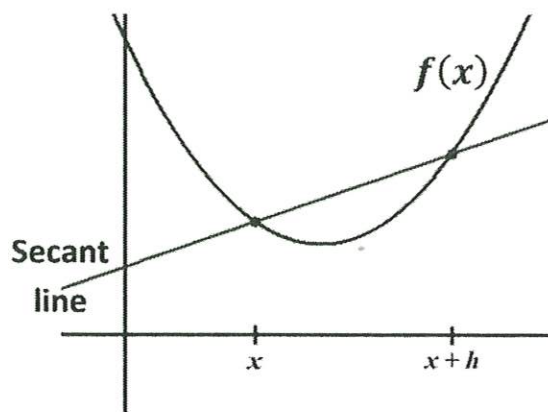
12. Which of the following represents the slope of the secant line?

A) $\frac{f(x + h) - f(x)}{x - (x + h)}$

B) $\frac{x - (x + h)}{f(x + h) - f(x)}$

C) $\frac{f(x + h) - f(x)}{x + h - x}$

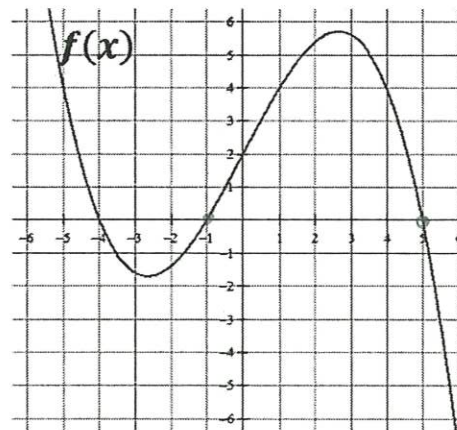
D) $\frac{f(x) - f(x + h)}{x + h - x}$



13. Which of the following statements about $f(x)$ is true?

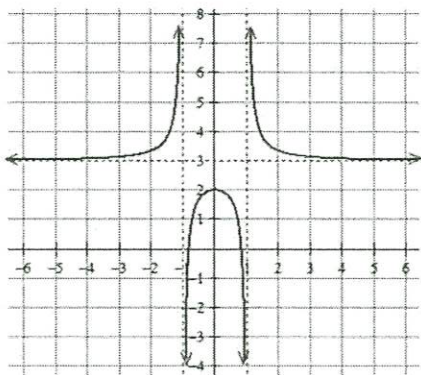
- I. $f(2) = 0$ ✗
- II. $(x + 4)$ is a factor of $f(x)$ ✓ $x = -4$ is a zero.
- III. $f(5) = f(-1)$ ✓

- A) I only
- B) II only
- C) III only
- D) I and III only
- E) II and III only**



State the domain and range of the function in interval notation. Find all horizontal and vertical asymptotes.

14.



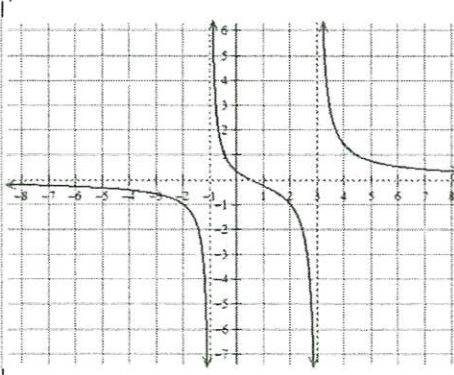
Domain:
 $(-\infty, -1) \cup (-1, 1) \cup (1, \infty)$

Range:
 $(-\infty, 2] \cup (3, \infty)$

Horizontal Asymptote(s):
 $y = 3$

Vertical Asymptote(s):
 $x = -1$
 $x = 1$

15.



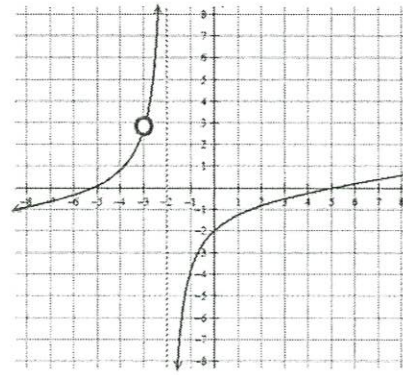
Domain:
 $(-\infty, -1) \cup (-1, 3) \cup (3, \infty)$

Range:
 $(-\infty, \infty)$

Horizontal Asymptote(s):
 $y = 0$

Vertical Asymptote(s):
 $x = -1$
 $x = 3$

16.



Domain:
 $(-\infty, -3) \cup (-3, -2) \cup (-2, \infty)$

Range:
 $(-\infty, \infty)$

Horizontal Asymptote(s):
 None

Vertical Asymptote(s):
 $x = -2$

Multiple Choice!

17. Which of the following functions has a vertical asymptote at $x = 4$?

A) $\frac{x+5}{x^2-4}$

B) $\frac{x^2-16}{x-4}$ ~~$\frac{(x-4)(x+4)}{(x-4)}$~~

C) $\frac{4x}{x+1}$

D) $\frac{x+6}{x^2-7x+12}$
 $(x-3)(x-4)$

E) None of the above

18. Consider the function $f(x) = \frac{x^2-5x+6}{x^2-4}$. Which of the following statements is true?

- I. $f(x)$ has a vertical asymptote of $x = 2$
- II. $f(x)$ has a vertical asymptote of $x = -2$ ✓
- III. $f(x)$ has a horizontal asymptote of $y = 1$ ✓

~~$\frac{(x-3)(x-2)}{(x-2)(x+2)}$~~

- A) I only
- B) II only
- C) I and III only
- D) II and III only
- E) I, II, and III

Rewrite the following using rational exponents. For example, $\frac{1}{\sqrt[3]{x^2}} = x^{-2/3}$

19. $\sqrt[5]{x^3} + \sqrt[5]{2x}$

$x^{3/5} + (2x)^{1/5}$

20. $\sqrt{x+1}$

$(x+1)^{1/2}$

21. $\frac{1}{\sqrt{x+1}}$

$(x+1)^{-1/2}$

22. $\frac{1}{\sqrt{x}} - \frac{2}{x}$

$x^{-1/2} - 2x^{-1}$

23. $\frac{1}{4x^3} + \frac{1}{2}\sqrt[4]{x^3}$

$(4x^3)^{-1} + \frac{1}{2}x^{3/4}$

$\frac{1}{4}x^{-3} + \frac{1}{2}x^{3/4}$

24. $\frac{1}{4\sqrt{x}} - 2\sqrt{x+1}$

$\frac{1}{4}x^{-1/2} - 2(x+1)^{-1/2}$

Rewrite each expression in radical form and positive exponents. For example, $x^{-2/3} + x^{-2} = \frac{1}{\sqrt[3]{x^2}} + \frac{1}{x^2}$

25. $x^{-1/2} - x^{3/2}$

$$\frac{1}{\sqrt{x}} - \sqrt{x^3}$$

26. $\frac{1}{2}x^{-1/2} + x^{-1}$

$$\frac{1}{2\sqrt{x}} + \frac{1}{x}$$

27. $3x^{-1/2}$

$$\frac{3}{\sqrt{x}}$$

28. $(x+4)^{-1/2}$

$$\frac{1}{\sqrt{x+4}}$$

29. $x^{-2} + x^{1/2}$

$$\frac{1}{x^2} + \sqrt{x}$$

30. $2x^{-2} + \frac{3}{2}x^{-1}$

$$\frac{2}{x^2} + \frac{3}{2x}$$

Solve the following equations. Remember $e^0 = 1$ and $\ln 1 = 0$

31. $e^x + 1 = 2$

$\ln(e^x) = \ln 1$
 $x = 0$

32. $3e^x + 5 = 8$

$3e^x + 5 = 8$
 $3e^x = 3$
 $\ln e^x = \ln 1$
 $x = 0$

33. $e^{2x} = 1$

$\ln e^{2x} = \ln 1$
 $2x = 0$
 $x = 0$

34. $\ln x = 0$

$x = 1$

35. $3 - \ln x = 3$

$-\ln x = 0$
 $e^{-\ln x} = e^0$
 $x = 1$

36. $\ln(3x) = 0$

$3x = 1$
 $x = \frac{1}{3}$

37. $x^2 - 3x = 0$

$x(x-3) = 0$
 $x = 0 \quad x = 3$

38. $e^x + xe^x = 0$

$e^x(1+x) = 0$
 $\downarrow \quad \downarrow$
 $e^x = 0 \quad 1+x = 0$
 NOT possible $x = -1$

39. $e^{2x} - e^x = 0$

$e^x(e^x - 1) = 0$
 $\downarrow \quad \downarrow$
 $e^x = 0 \quad e^x - 1 = 0$
 NOT possible $\ln e^x = \ln 1$
 $x = 0$

You know trig values in radians! You can use the Unit Circle or Special Right Triangles to find the following.

40. $\sin \frac{\pi}{6}$ $\boxed{\frac{1}{2}}$	41. $\cos \frac{\pi}{4}$ $\boxed{\frac{\sqrt{2}}{2}}$	42. $\sin 2\pi$ $\boxed{0}$
43. $\tan \pi$ $\boxed{0}$	44. $\sec \frac{\pi}{2}$ $\frac{1}{\cos \pi/2} = \frac{1}{0}$ $\boxed{\text{undefined}}$	45. $\cos \frac{\pi}{6}$ $\boxed{\frac{\sqrt{3}}{2}}$
46. $\sin \frac{\pi}{3}$ $\boxed{\frac{\sqrt{3}}{2}}$	47. $\sin \frac{3\pi}{2}$ $\boxed{-1}$	48. $\tan \frac{\pi}{4}$ $\boxed{1}$
49. $\csc \frac{\pi}{2}$ $\frac{1}{\sin \pi/2}$ $\boxed{1}$	50. $\sin \pi$ $\boxed{0}$	51. $\cos \frac{\pi}{3}$ $\boxed{\frac{1}{2}}$
52. Find x where $0 \leq x \leq 2\pi$ $\sin x = \frac{1}{2}$ $\boxed{x = \frac{\pi}{6} \text{ and } \frac{5\pi}{6}}$	53. Find x where $0 \leq x \leq 2\pi$: $\tan x = 0$ $\boxed{x = 0, \pi, 2\pi}$	54. Find x where $0 \leq x \leq 2\pi$: $\cos x = -1$ $\boxed{x = \pi}$

Solve the following trig equations where $0 \leq x \leq 2\pi$.

55. $\sin x = \frac{1}{2}$ $\boxed{x = \frac{\pi}{6}, \frac{5\pi}{6}}$	56. $\cos x = -1$ $\boxed{x = \pi}$	57. $\cos x = \frac{\sqrt{3}}{2}$ $\boxed{x = \frac{\pi}{6}, \frac{11\pi}{6}}$
58. $2 \sin x = -1$ $\sin x = -\frac{1}{2}$ $\boxed{x = \frac{7\pi}{6}, \frac{11\pi}{6}}$	59. $\cos x = \frac{\sqrt{2}}{2}$ $\boxed{x = \frac{\pi}{4}, \frac{7\pi}{4}}$	60. $\cos\left(\frac{x}{2}\right) = \frac{\sqrt{3}}{2}$ $\theta = \pi/6$ $\frac{x}{2} = \frac{\pi}{6}$ $\frac{x}{2} = \frac{11\pi}{6}$ $\boxed{x = \frac{\pi}{3}}$ $x = \frac{11\pi}{3}$ ← NOT in domain interval
61. $\tan x = 0$ $\boxed{x = 0, \pi, 2\pi}$	62. $\sin(2x) = 1$ $\theta = \pi/2$ $2x = \frac{\pi}{2}$ $\boxed{x = \frac{\pi}{4}}$	63. $\sin\left(\frac{x}{4}\right) = \frac{\sqrt{3}}{2}$ $\theta = \pi/3, 2\pi/3$ $\frac{x}{4} = \frac{\pi}{3}$ $\frac{x}{4} = \frac{2\pi}{3}$ $\boxed{x = \frac{4\pi}{3}}$ $\boxed{x = \frac{8\pi}{3}}$

State the domain and range of each function.

Function	Domain	Range
64. $f(x) = \sqrt{x-4}$	$(-\infty, 4) \cup (4, \infty)$ $x \geq 4$	$(0, \infty)$ $y \geq 0$
65. $g(x) = (x-3)^2$	$(-\infty, \infty) \quad \mathbb{R}$	$(0, \infty) \quad y \geq 0$
66. $y = \ln x$	$(0, \infty) \quad x > 0$	$(-\infty, \infty) \quad \mathbb{R}$
67. $y = e^x$	$(-\infty, \infty) \quad \mathbb{R}$	$(0, \infty) \quad y > 0$
68. $y = \sqrt{4-x^2}$	$[-2, 2]$ $-2 \leq x \leq 2$	$[0, 2]$ $0 \leq y \leq 2$

Simplify.

69. $\frac{\sqrt{x}}{x} = \frac{x^{1/2}}{x} = x^{-1/2} = \frac{1}{\sqrt{x}}$	70. $e^{\ln x} = x$	71. $e^{1+\ln x} = e^1 \cdot e^{\ln x} = ex$
72. $\ln 1 = 0$	73. $\ln e^7 = 7$	74. $\log_3 \frac{1}{3}$ $3^x = \frac{1}{3}$ $x = -1$
75. $\log_{1/2} 8$ $\frac{1}{2}^x = 8$ $x = -3$	76. $\ln \frac{1}{2}$ *calc. ~ 0.693	77. $27^{2/3}$ $\sqrt[3]{27^2} = 9$
78. $(5a^{2/3})(4a^{3/2}) = 20a^{13/6}$	79. $\frac{4xy^{-2}}{12x^{-1/3}y^{-5}} = \frac{x^{4/3}y^3}{3x^{1/3}y^3} = \frac{x^{4/3-1/3}y^3-3}{3} = \frac{x^1y^0}{3} = \frac{x}{3}$	80. $(4a^3)^{3/2} = \sqrt{4^3} \cdot a^{15/6} = 8a^{5/2}$

Use the functions defined below to determine each of the following.

$$f(x) = \{(3, 5), (2, 4), (1, 7)\}$$

$$g(x) = \sqrt{x-3}$$

$$h(x) = \{(3, 2), (4, 3), (1, 6)\}$$

$$k(x) = x^2 + 5$$

81. $(f+h)(1)$

$$f(1) + h(1)$$

$$7 + 6$$

$$\boxed{13}$$

82. $(k-g)(5)$

$$(5^2 + 5) - (\sqrt{5-3})$$

$$\boxed{30 - \sqrt{2}}$$

83. $f(h(3))$

$$f(2) = \boxed{4}$$

84. $g(k(7))$

$$k(7) = 49 + 5 = 54$$

$$g(54) = \boxed{\sqrt{51}}$$

85. $h(3)$

$$\boxed{2}$$

86. $g(g(9))$

$$g(9) = \sqrt{6}$$

$$g(\sqrt{6}) = \boxed{\sqrt{\sqrt{6}-3}}$$

87. $f^{-1}(4)$

$$f^{-1}(x) = \{(5, 3), (4, 2), (7, 1)\}$$

$$f^{-1}(4) = \boxed{2}$$

88. $k^{-1}(x)$

$$y = x^2 + 5$$

$$x = y^2 + 5$$

$$y = \sqrt{x-5}$$

$$\boxed{k^{-1}(x) = \sqrt{x-5}}$$

89. $k(g(x))$

$$\downarrow$$

$$\sqrt{x-3}$$

$$(\sqrt{x-3})^2 + 5$$

$$x - 3 + 5$$

$$\boxed{x + 2}$$

90. $g(f(2))$

$$f(2) = 4$$

$$g(4) = \sqrt{4-3} = \sqrt{1} = \boxed{1}$$

Fill out the Unit Circle.

